

PHYSICAL SCIENCE

Name _____

HOME WORK 3-31
DUE 4-1

DSHS
Mrs. Ellis

BALANCING EQUATIONS and TYPE OF REACTIONS


Balance the following equations and list the type of reaction:



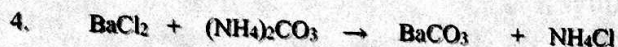
Type of Reaction _____



Type of Reaction _____



Type of Reaction _____



Type of Reaction _____



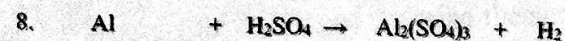
Type of Reaction _____



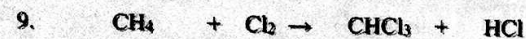
Type of Reaction _____



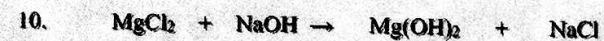
Type of Reaction _____



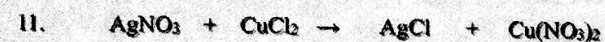
Type of Reaction _____



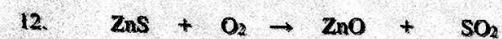
Type of Reaction _____



Type of Reaction _____



Type of Reaction _____



Type of Reaction _____